

Key Vocabulary

time

clock

hours

minutes

hand

o'clock

half past

quarter past

quarter to

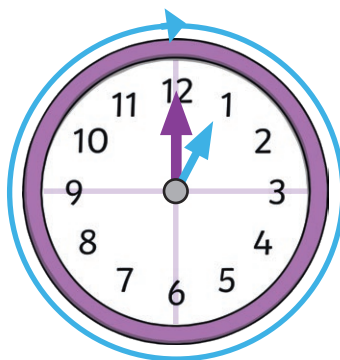
five minutes

duration

shorter

longer

O'Clock

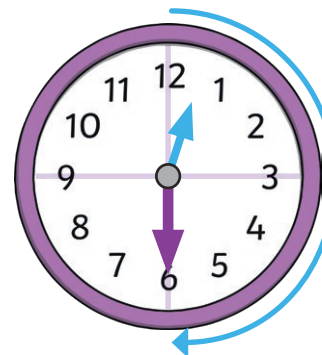


1 o'clock

It takes one hour for the **hour hand** to turn from the number showing this hour and the number showing the next hour.

It takes the **minute hand** an hour to make a whole turn around the clock.

Half Past

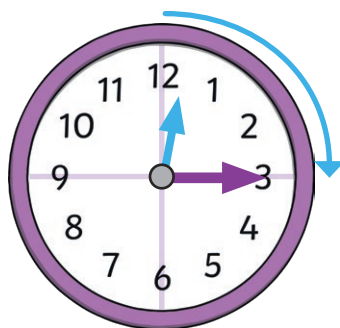


half past 12

It takes half an hour for the **hour hand** to turn halfway between the number showing this hour and the number showing the next hour.

It takes half an hour for the **minute hand** to turn halfway around the clock.

Quarter Past

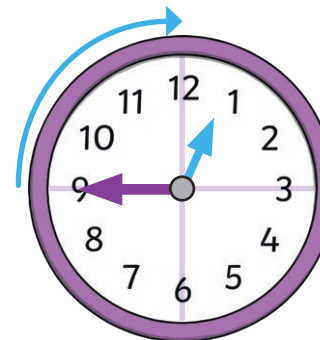


quarter past 12

It takes a quarter of an hour for the **hour hand** to turn a quarter of the way between the number showing this hour and the number showing the next hour.

It takes a quarter of an hour for the **minute hand** to turn a quarter of the way around the clock.

Quarter To

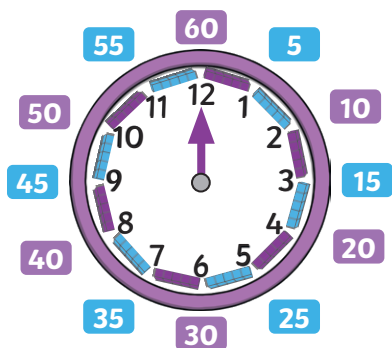


quarter to 1

It will take the **hour hand** a quarter of an hour to reach the number representing the next hour.

It will take the **minute hand** a quarter of an hour to begin the new hour.

Minutes in an Hour




There are 60 minutes in one hour.



Hours in a Day

Each day, the hour hand makes 2 full turns around the clock.

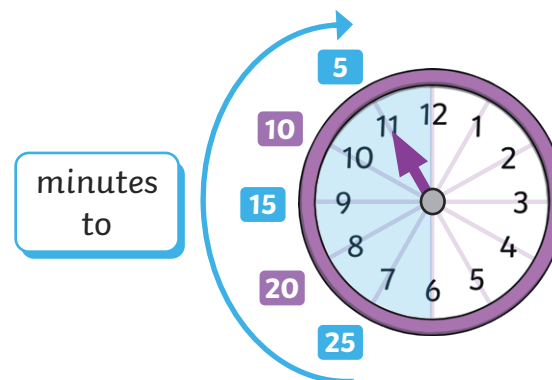


Each whole turn takes **12 hours**.

There are **24 hours** in a day.



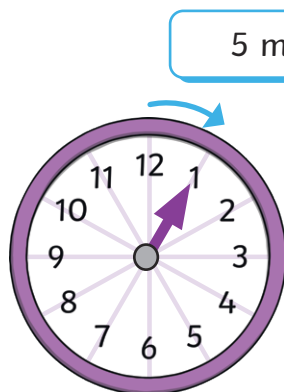
5 Minute Intervals to the Hour



minutes to

When the **minute hand** turns through the left side of the clock, it shows minutes **to** the next hour.

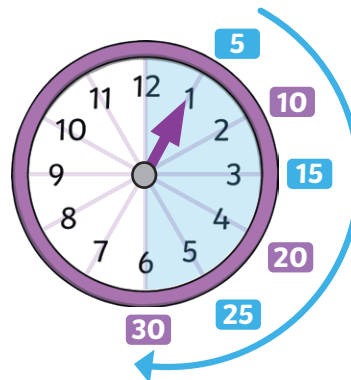
5 Minute Intervals



5 minutes

It takes five minutes for the **minute hand** to turn from one number to the next.

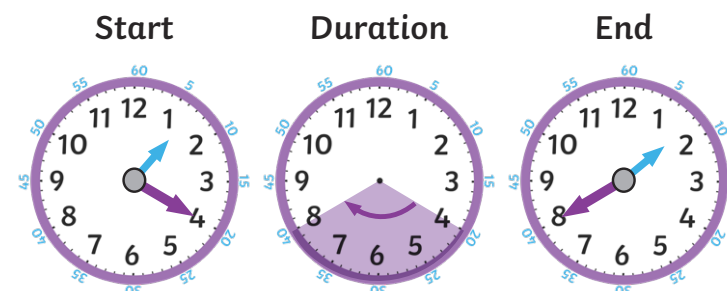
5 Minute Intervals past the Hour



minutes past

When the **minute hand** turns through the right side of the clock, it shows minutes **past** the hour.

Find Durations of Time



20 minutes have passed.